

Chapter two: Precipitation

□ What is precipitation?

- ❖ Precipitation is that part of atmospheric moisture that reaches the earth's surface in different forms
- ❖ The essential requirements for precipitation to occur:
 - ✓ Moisture in the atmosphere
 - ✓ Presence of nuclei around which condensation vapor takes place
 - ✓ Dynamic cooling responsible for condensation of water vapor
 - ✓ Precipitation product must reach the ground in some form

Cont.....

☐ Forms of precipitation (ppt):

- ❖ Rain: when ppt reaches the surface of the earth as droplets of water (size: 0.5-6mm)
- ❖ Snow: when ppt falls in the form of ice-crystals (hexagonal in shape).
 - ✓ It may fall separately or combines to form a flake
 - ✓ The density of snow is 0.1g/cc
- ❖ Drizzle: water droplets of size less than 0.5mm. It appears to be floating in the air
- ❖ Hail: it is the precipitating rain in the form of any irregular form of ice with size ranging from 5 to 50 mm
- ❖ Dew: during night when the surface of the objects on earth cools by radiation, the moisture present in the atmosphere condenses on the surface of these objects forming droplets of water

Cont.....

❑ What are the types of precipitation?

❖ Precipitation formation is classified according to the factors responsible for lifting the air mass. The types of precipitation are:

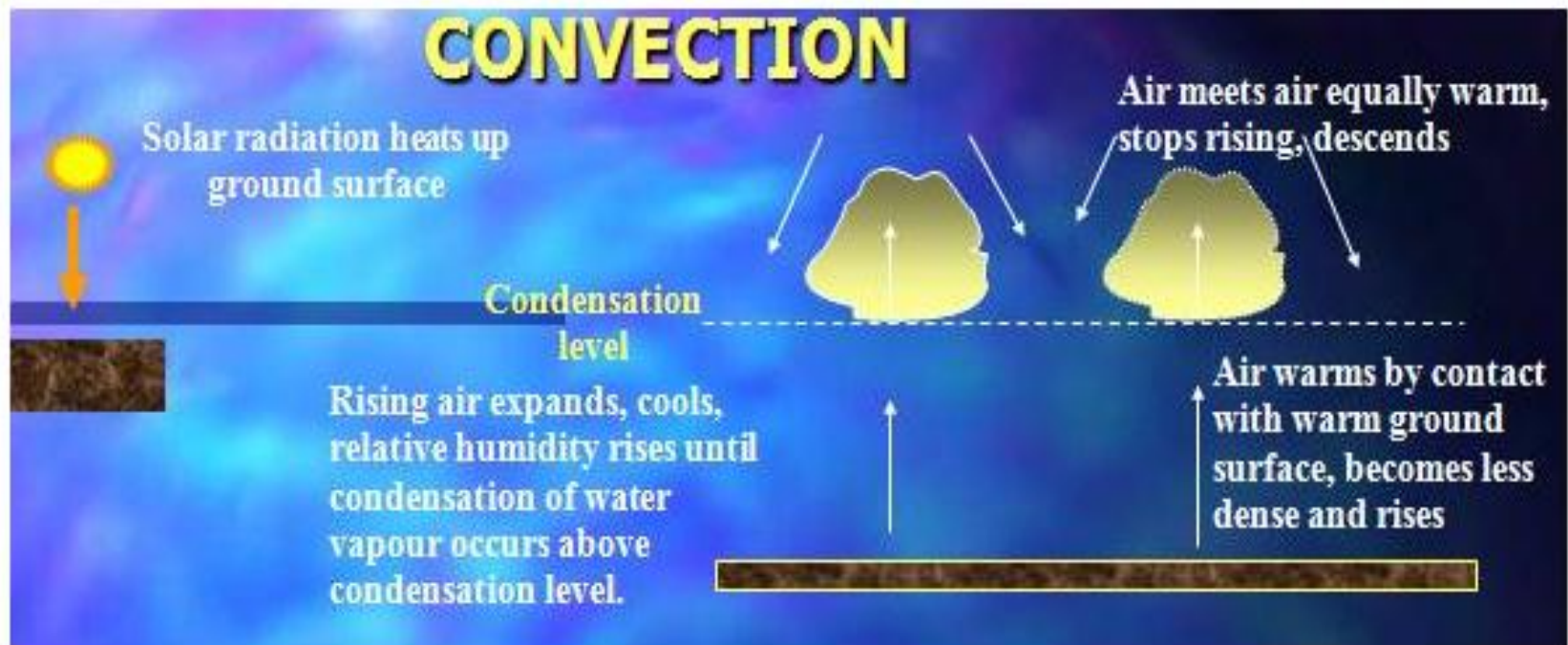
✓ Convective

✓ Orographic

✓ Cyclonic

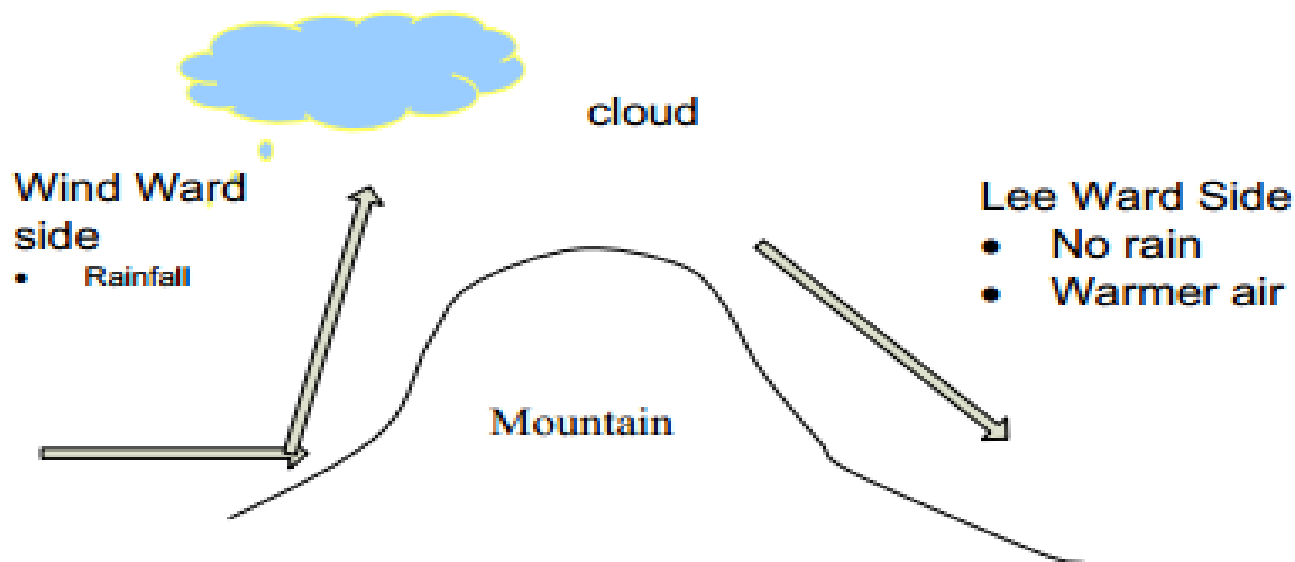
Cont....

- ✓ Convective: lifting of unstable air that is warmer than surrounding air due to uneven surface heating
- thunder storms
- spotty and highly variable in intensity



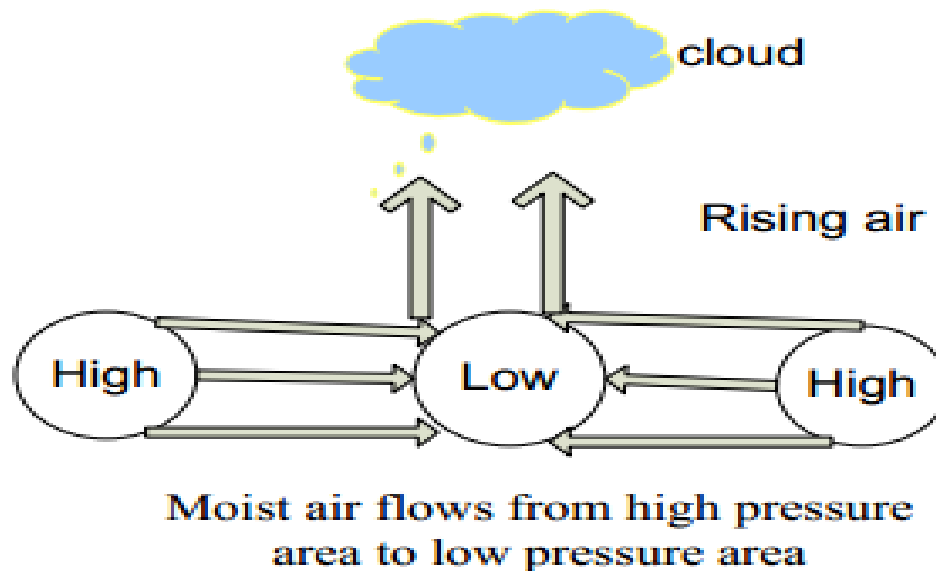
Cont.....

- ❖ Orographic: mountain range barriers cause lifting of the air masses
- ✓ Moist air is forced over mountain barriers by westerly air flow & ppt falls on wind (i.e., west) side of mountain range while the leeward (eastern) side is warmer and drier
- Medium to high intensity rainfall continuing for longer duration



Cont.....

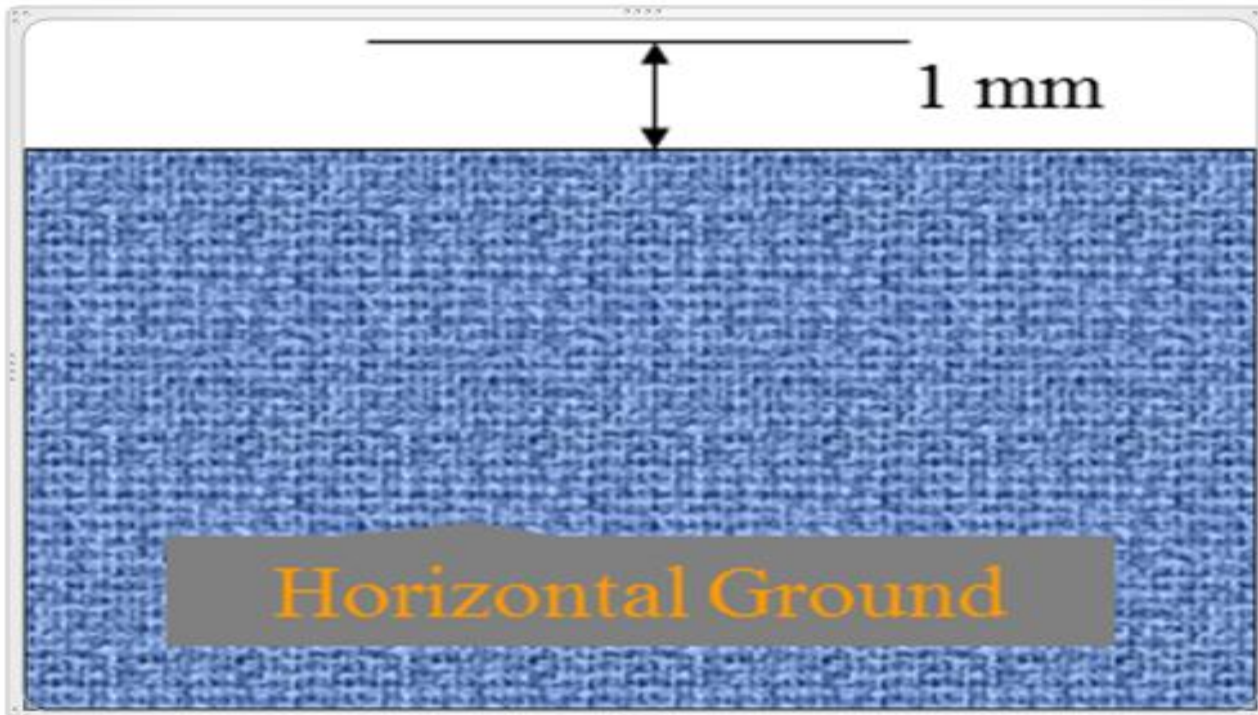
- ❖ Cyclonic: a cyclone is a low pressure area surrounded by a larger high pressure area.
- ✓ When a low pressure occurs in an area, especially over large water bodies It causes the air at the low pressure zone to lift
- The name of this cyclones vary in different places
 - Tropical cyclone (in India)
 - Typhoon (South East Asia)
 - Hurricane (America)



Cont.....

❑ Measurement of precipitation

- ❖ Precipitation is measured as a vertical depth of water that would accumulate on the horizontal surface
- ❖ Units of measurement: mm, cms, inches, feet, etc



Cont....

- ❖ It is collected & measured by in instrument called rain gauge
- ❖ Instruments that measure precipitation are:
 - **Non-recording**
 - **cylindrical container type**





Cont....

➤ Self recording

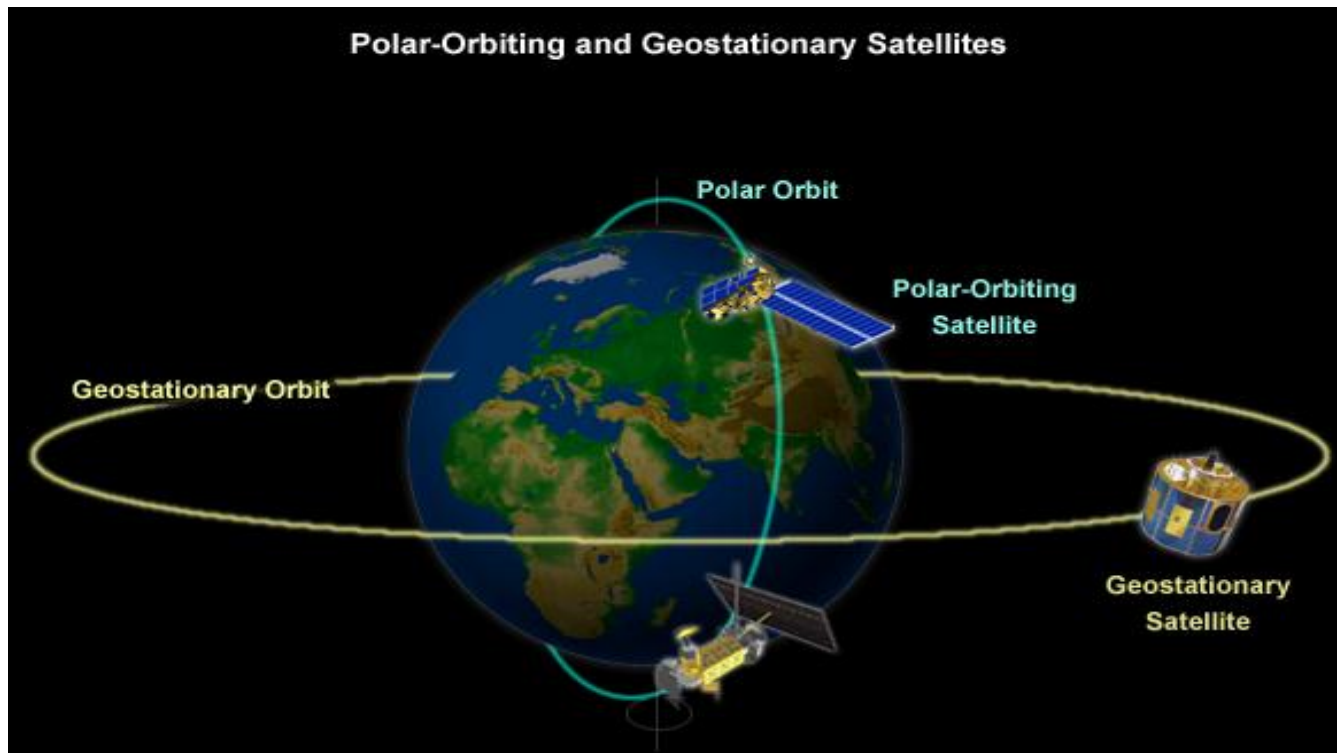
- weighing type
- float type
- tipping bucket type

Rainfall Recorders

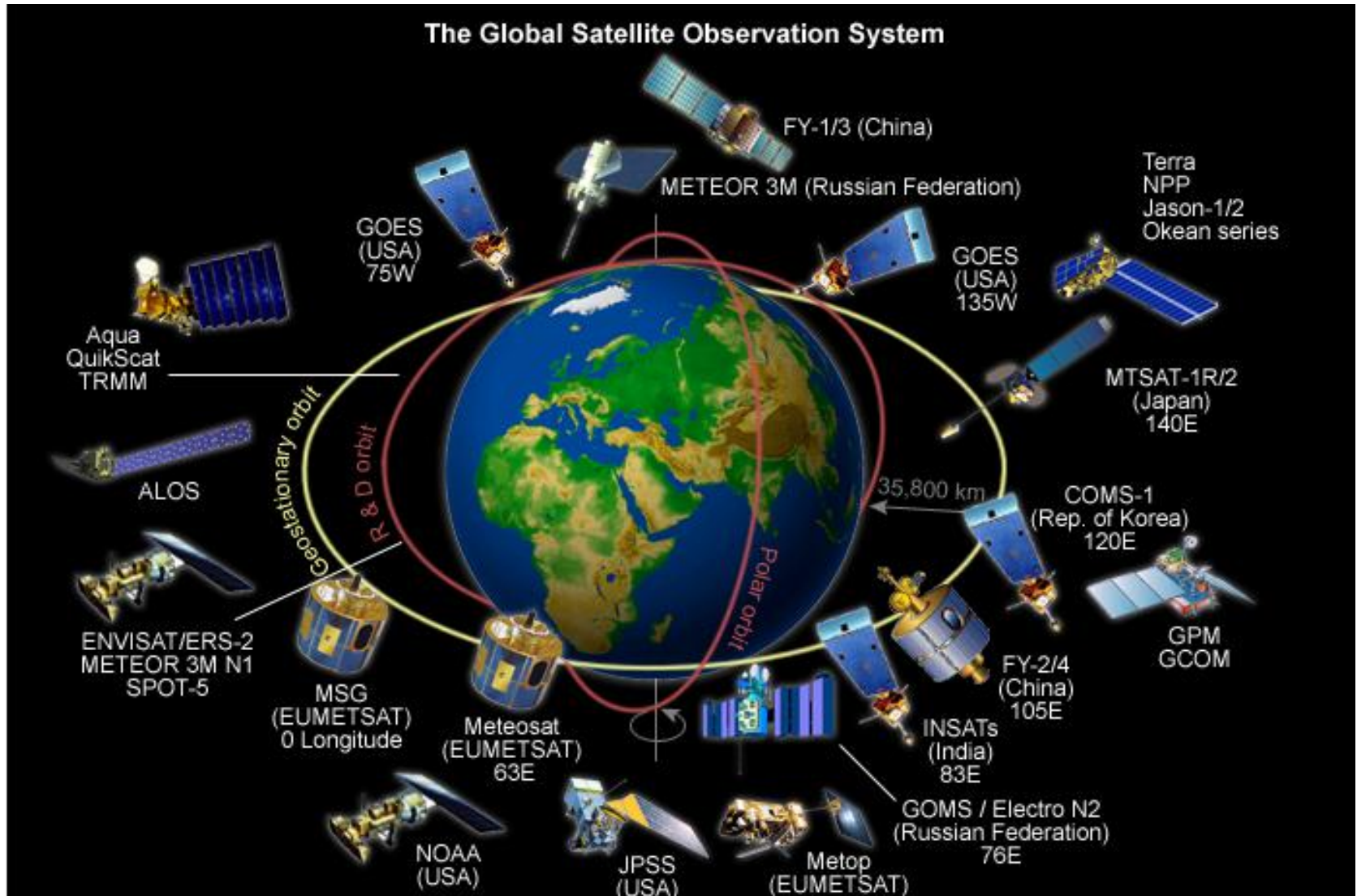


Cont.....

- **Remotely sensed techniques**
- Satellites are in the unique position of being able to provide a broad, spatially consistent, and continuous global sampling of many essential climate variables like precipitation

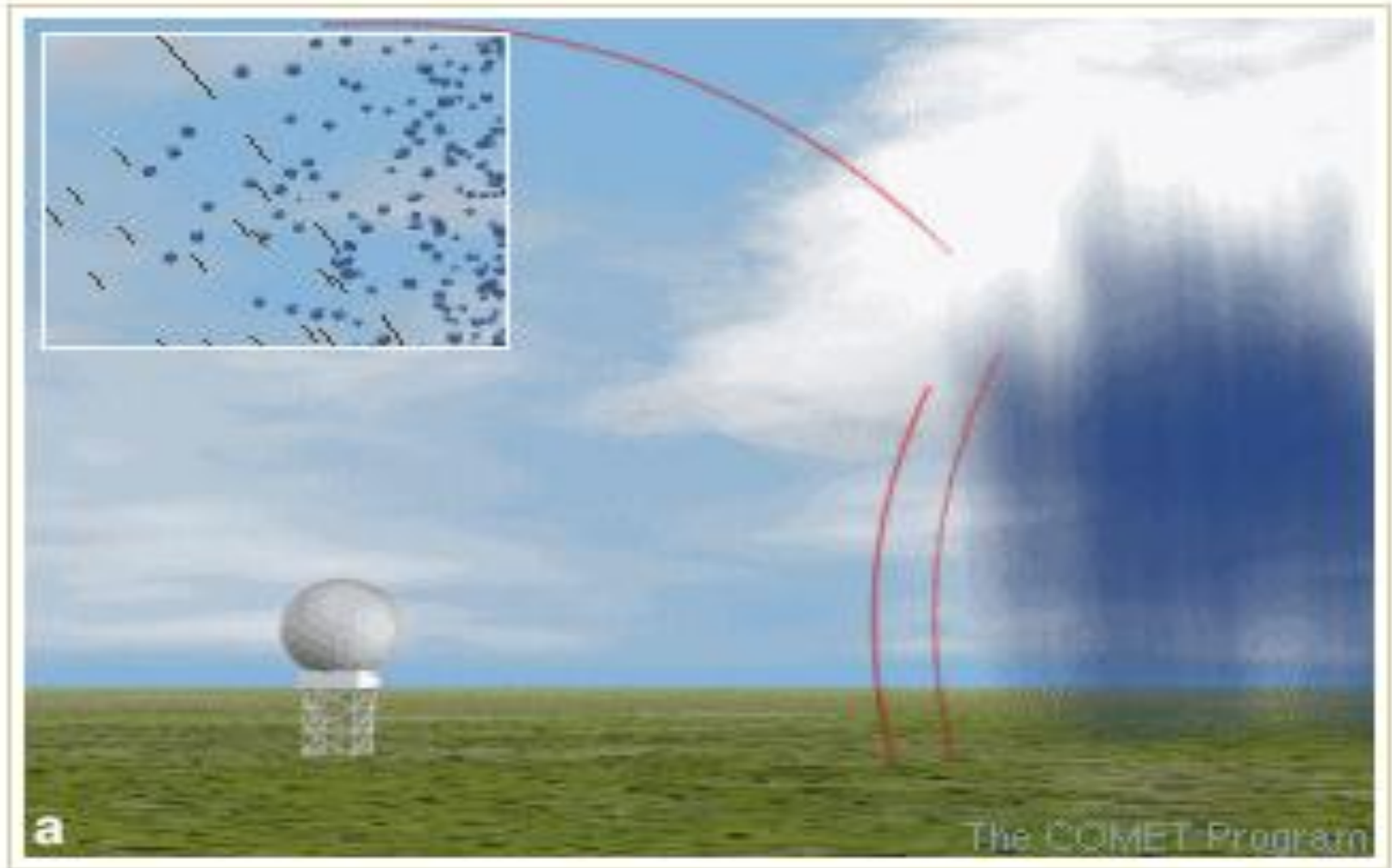


Cont....



Cont...

- Radar



Cont.....

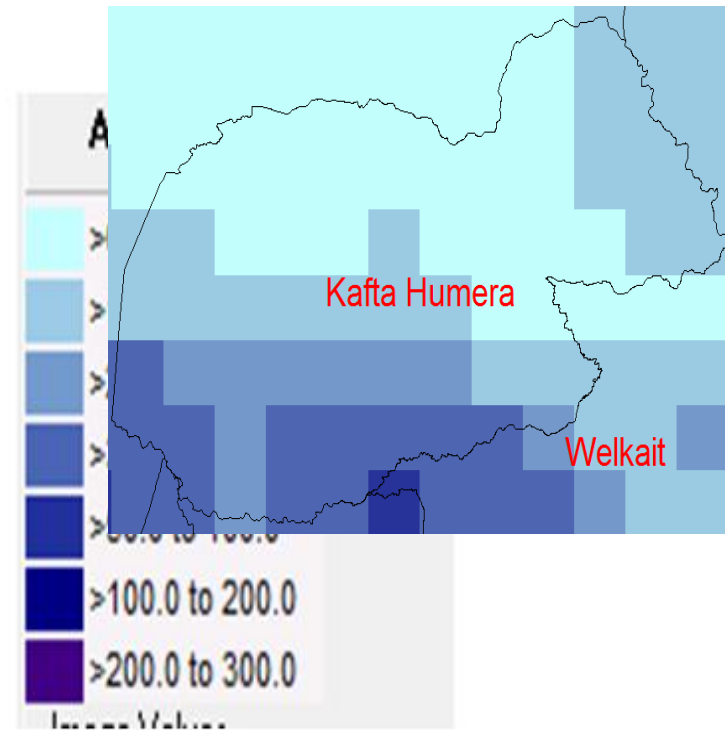
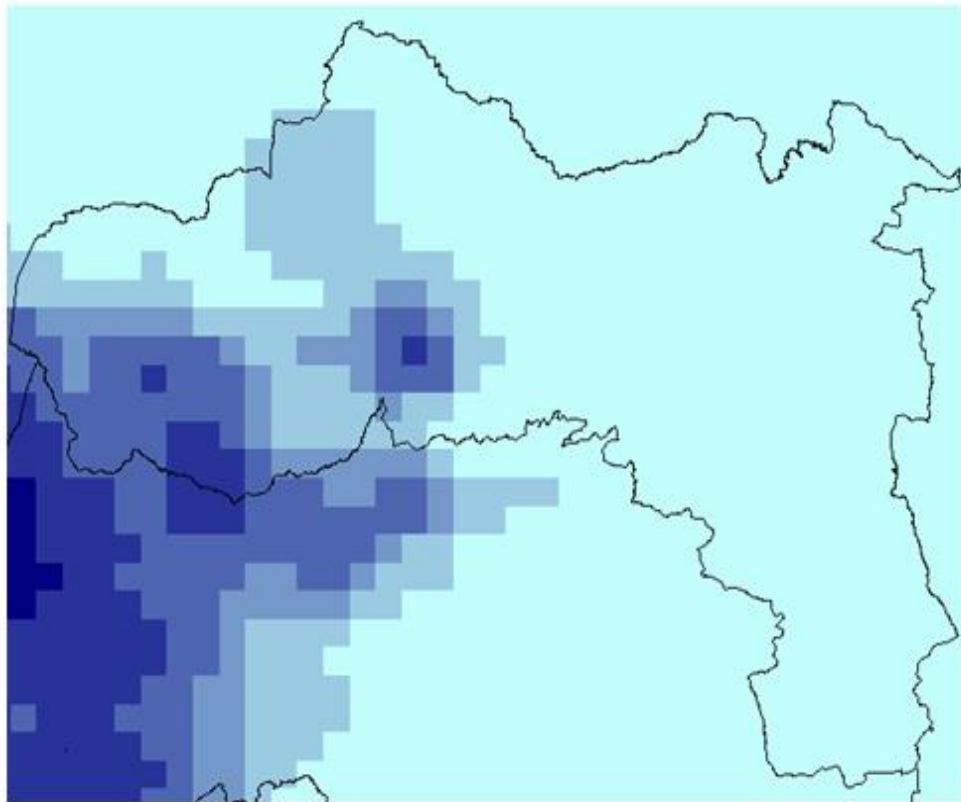
Weather Radar

- Measurement of rainfall by weather radar based on principle of that the amount of power returned from raindrop is related to rainfall intensity. The advantages are:
- Total aerial rainfall can be computed in near real time using online computers at the weather station
- Can be used for flood forecasting
- The movement of weather system can be tracked and shown
- can forecast time of onset, cession and rainfall intensity
- Dangerous meteorological phenomena can be detected

Cont...

- Example

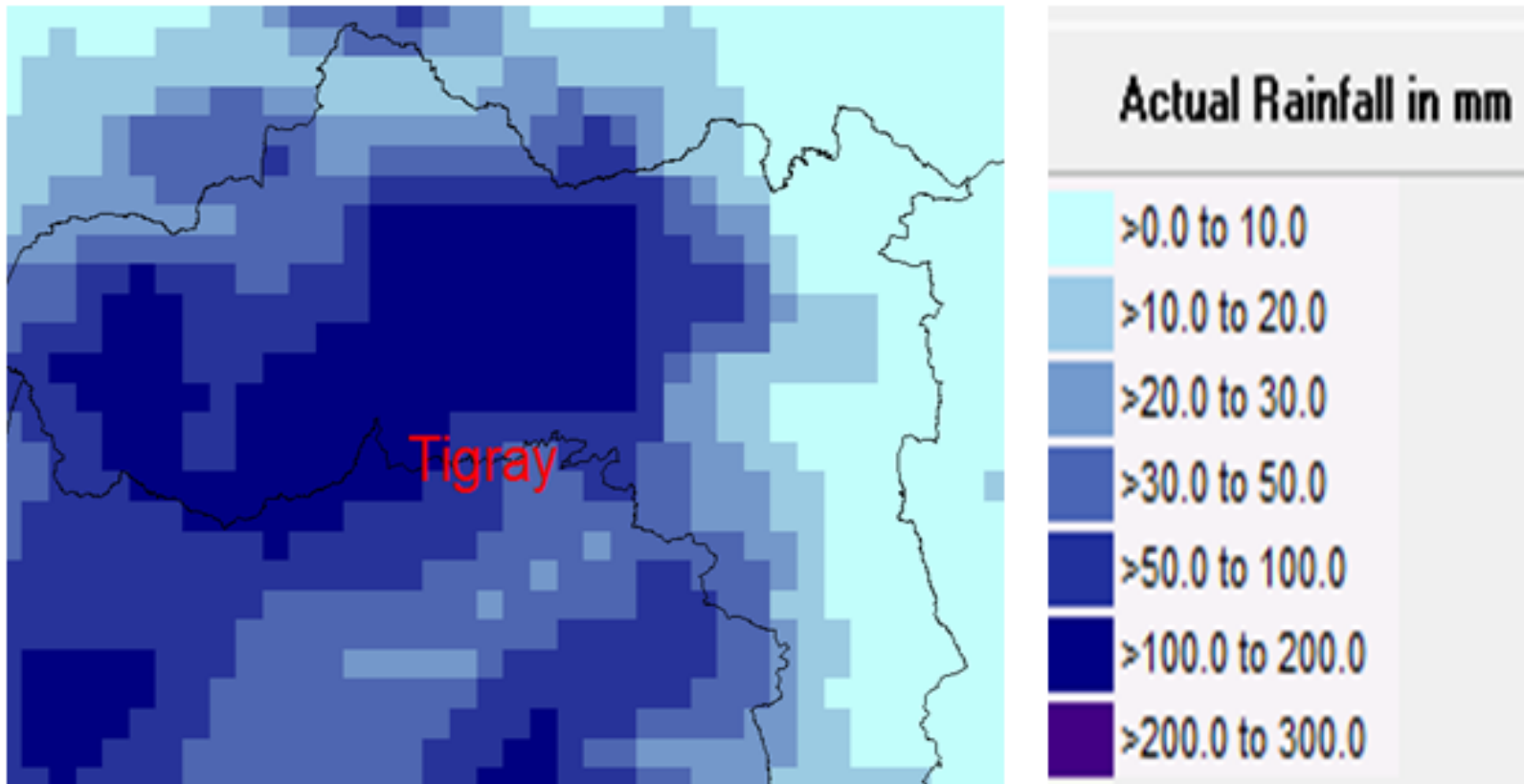
Satellite rainfall estimation of Tigray Region in the first ten days of June 2003



Cont....

- Example

Satellite rainfall estimation of Tigray Region in the second ten days of July 2003



Cont...

❑ Ideal Location for a Rain Gauge Station

➤ While setting up any rain Gauge station the following points should be noted.

- I. The site should be on a level ground, i.e., slopping ground, hill tops or hill slopes are not suitable.
- II. The site should be an open space.
- III. Horizontal distance between the rain gauge and the nearest objects should be twice the height of the objects.
- IV. Site should be away from continuous wind forces.
- V. Other meteorological instruments and the fencing of the site should maintain the step III) above.
- VI. The site should be easily accessible.
- VII. The gauge should be truly vertical.
- VIII. Ten percent of total number of rain gauge stations of any basin should be self-recording.
- IX. The observer must visit the site regularly to ensure its proper readiness for measurement.

Cont..

- Location of meteorological stations



Cont....

❑ **Precipitation data errors**

- ❖ The most significant cause of error in rain data
- Observations are usually turbulent airflow around the gauge.
- The dependence of rain gauge catch on wind speed
- Evaporation from within the measuring cylinder
- Adhesion of water to funnel, (water then evaporates)
- Gauge leaks, blockages or overflows in storms
- Error in observation or transcription
- Splash in or out

Cont...

❑ Estimating missing data and of Adjustment of records

- ❖ Complete measured precipitation data are important to many problems in hydrologic analysis and design but there are missing values
- ❖ The causes of missing rainfall data are:
 - The failure of the observer to make the necessary visit to the gage may result in missing data.
 - Vandalism of recording gages is another problem that results in incomplete data records
 - Instrument failure because of mechanical or electrical malfunctioning can result in missing data.

Cont...

- ❑ Some of the methods of estimating missing rainfall values are
 1. Station-Average Method
 2. Normal-Ratio Method
 3. Quadrant Method
 4. Regression method

Cont...

❖ Station-Average Method

- The station-average method for estimating missing data uses n gages from a region to estimate the missing point rainfall, P, at another gage

Where

$$\hat{P} = \frac{1}{n} \sum_{i=1}^n P_i$$

- P_i is the catch at gage i.
- Equation is conceptually simple, but may not be accurate when the total annual catch at any of the n regional gages differ from the annual catch at the point of interest by more than 10%.

Cont.....

Example, consider the following data

Gage	Annual precipitation(mm)	Monthly precipitation (mm)
A	420	26
B	410	31
C	390	23
X	410	?

Cont..

- Ten percent of the annual catch at gage X is 41 mm and the average annual catch at each of the three regional gages is within + or - 41 mm.; therefore, the station-average method can be used. The estimated catch at the gage with the missing monthly precipitation total is

$$\tilde{P} = 1/3(26+31+23) = 26.667\text{mm}$$

- This method is often used in flat areas with very less rainfall variability

Cont.....

❖ Normal-Ratio Method

$$\hat{P} = \sum_{i=1}^n w_i P_i$$

Where

- w_i = the weight for the rainfall depth P_i at gage i . The weight for station i is computed by

$$w_i = \frac{A_x}{nA_i}$$

Where

- A_i = the average annual catch at gage i ,
- A_x , = the average annual catch at station X ,
- n = the number of stations.
- Note:

When the average annual catches differ by more than 10%, the normal-ratio method is preferable; such differences might occur in regions where there are large differences in elevation (for example, regions where orographic effects are present) or where average annual rainfall is low but has high annual variability.

Cont...

- Example

To illustrate the normal-ratio method, consider the following data:

Gage	Annual precipitation(mm)	Monthly precipitation (mm)
A	410	24
B	370	23
C	460	31
X	400	?

Determine the monthly precipitation at gage X

Cont.....

- The monthly precipitation for gage X is missing and can be estimated using the data from the table
- The steps are
 - I. Calculate ten percent of annual precipitation at gage X which is 40
 - II. Add and subtract 40 from the annual precipitation of gage X to determine the range which is from 360mm to 440mm
 - III. Check whether all the annual precipitation of the stations are within the above range
 - IV. If at least one station is outside the range, use normal ratio method. As indicated in the table the annual precipitation of gage C is 460mm which is outside the range therefore we use normal ratio method to determine the missing data at station X

Cont..

- This how the missing value at gage X is calculated

$$\begin{aligned}\hat{P} &= w_A P_A + w_B P_B + w_C P_C \\ &= \frac{A_x}{nA_A} P_A + \frac{A_x}{nA_B} P_B + \frac{A_x}{nA_C} P_C \\ &= \frac{A_x}{n}(P_A/A_A + P_B/A_B + P_C/A_C) \\ &= \frac{400}{3}(24/410 + 23/370 + 31/460) \\ &= 25.08\end{aligned}$$

Cont...

- Inverse distance method(U.S. weather Service method)

The missing rainfall data of the station X is computed by the following equation.

$$p_x = \frac{\sum_{i=1}^n p_i * w_i}{\sum_{i=1}^n w_i}$$

where

$$W_i = \frac{1}{D_i^2} = \frac{1}{X_i^2 + Y_i^2}$$

p_i = the rainfall of the surrounding stations

(x_i, y_i) = the coordinate of each surrounding station

$(0,0)$ = the coordinate of the station with missing data

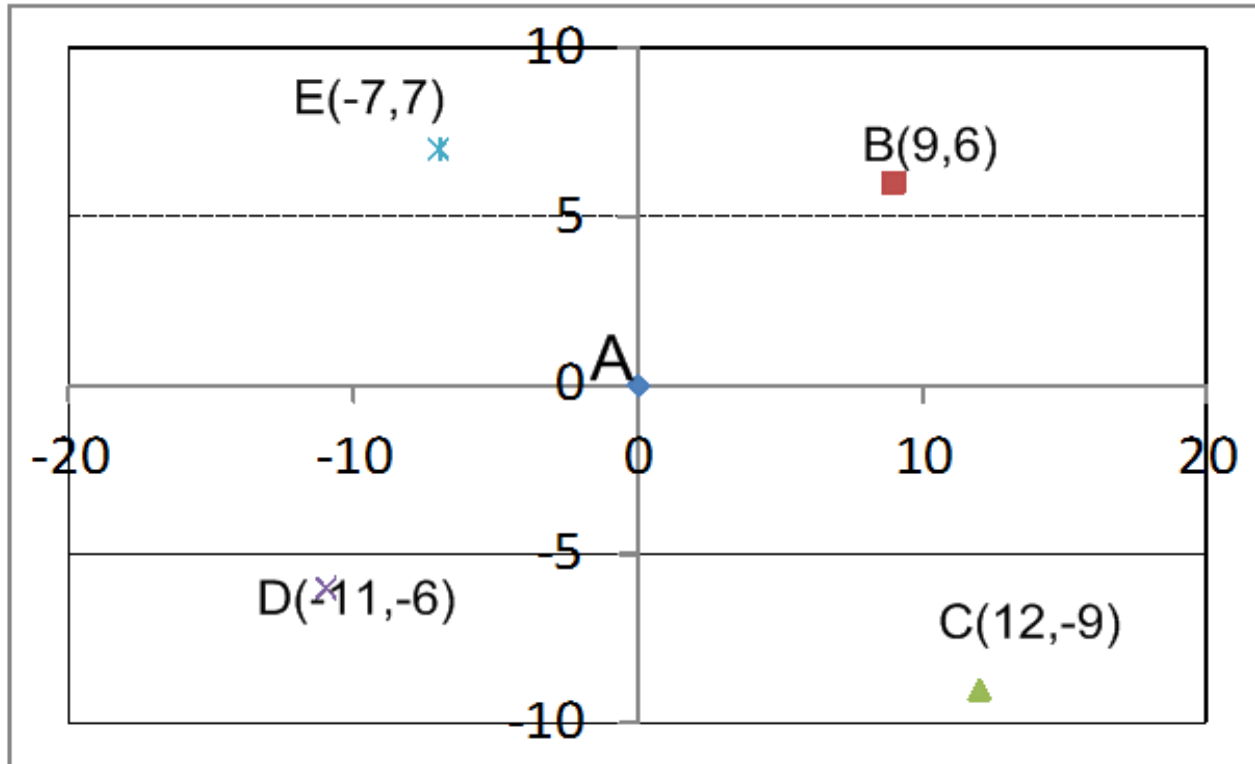
Note

This method considers the distance of the stations.

Cont...

- Example

In a river basin a station A was in operative during a storm, while stations B,C,D and E, surrounding A were in operation, recording 74mm,88mm,71mm and 80mm of monthly rainfall. The coordinates of the stations is given in the figure below. Estimate the missing monthly rainfall of station A by the inverse distance method.



Cont....

Stations	X_i	Y_i	x_i^2	y_i^2	$x_i^2 + y_i^2 = D_i$	$w_i = 1/D_i$	$P_i(\text{mm})$	$w_i * P_i$
B	9	6	81	36	117	0.008547	74	0.632479
C	12	-9	144	81	225	0.004444	88	0.391111
D	-11	-6	121	36	157	0.006369	71	0.452229
E	-7	7	49	49	98	0.010204	80	0.816327
sum						0.029565		2.292146
P_x	77.5291							

REGRESSION method for filling missing data

- Regression analysis is a procedure for fitting an equation to a set of data. Specifically, given a set of measurements on two random variables, y and x , regression provides a means for finding the values of the coefficients a and b for the straight line ($y = a + bx$) that best fits the data.

The coefficients a and b can be found using least square method using the following two equations simultaneously

$$\begin{aligned}na + b\sum x &= \sum y \\ a\sum x + b\sum x^2 &= \sum xy\end{aligned}$$

Cont..

- Example

The rainfall (RF) data of the table below are the annual rainfall (mm) and monthly rainfall (mm) of a meteorological station from 1990-1995 E.C. Estimate the monthly rainfall value of the station for the year 1996 E.C. using the regression method.

Data of a station		
Year	Annual RF(mm)	monthly RF(mm)
1990	1100	200
1991	1200	220
1992	1000	180
1993	950	170
1994	1150	210
1995	1250	230
1996	1300	x

Cont...

- Solution

- Develop an equation in the form of $y = a + bx$, That is
monthly RF = $a + b \times$ annual RF

- The coefficients a and b can be found using the equations

$$na + b\sum x = \sum y$$
$$a\sum x + b\sum x^2 = \sum xy$$

Data of a station				
Year	Annual RF(mm)(X)	monthly RF(mm)(y)	x ²	xy
1990	1100	200	1210000	220000
1991	1200	220	1440000	264000
1992	1000	180	1000000	180000
1993	950	170	902500	161500
1994	1150	210	1322500	241500
1995	1250	230	1562500	287500
1996	1300	x		
Sum	6650	1210	7437500	1354500

Cont..

- There fore, the equations become

$$6*a + b*6650=1210-----(1)$$

$$a*6650 + b*7437500=1354500-----(2)$$

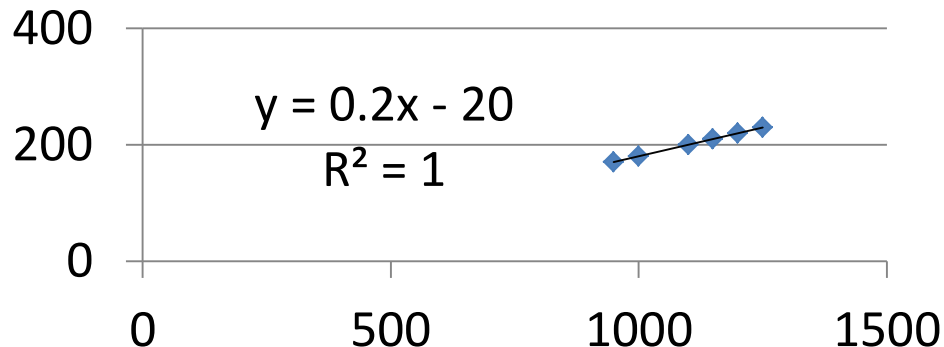
Solving the two equations simultaneously

$a = -20$ and $b = 0.2$ in which $y = -20 + 0.2x$ or

monthly rainfall = $-20 + 0.2 * \text{annual rainfall}$

To estimate the monthly rainfall for the year 1996 , substitute the annual rainfall of the year in to the equation and is estimated as

$$\begin{aligned} \text{monthly rainfall (mm)} &= -20 + 0.2 * 1300 \text{ mm} \\ &= 240 \text{ mm} \end{aligned}$$



Cont...

- ❑ Adjustment of rainfall records (gage consistency)
 - A consistent record is one where the characteristics of the record have not changed with time
 - An inconsistent record may result from any one of a number of events
 - Lack of consistence may be due to
 - Unreported shifting the rain gauge (by as much as 8 km aerially & 3m in elevation)
 - Significant construction work might have changed the surrounding
 - change of observational procedure
- ❖ Double-mass-curve analysis is the method that is used to check for an inconsistency in a gaged record.

Cont.....

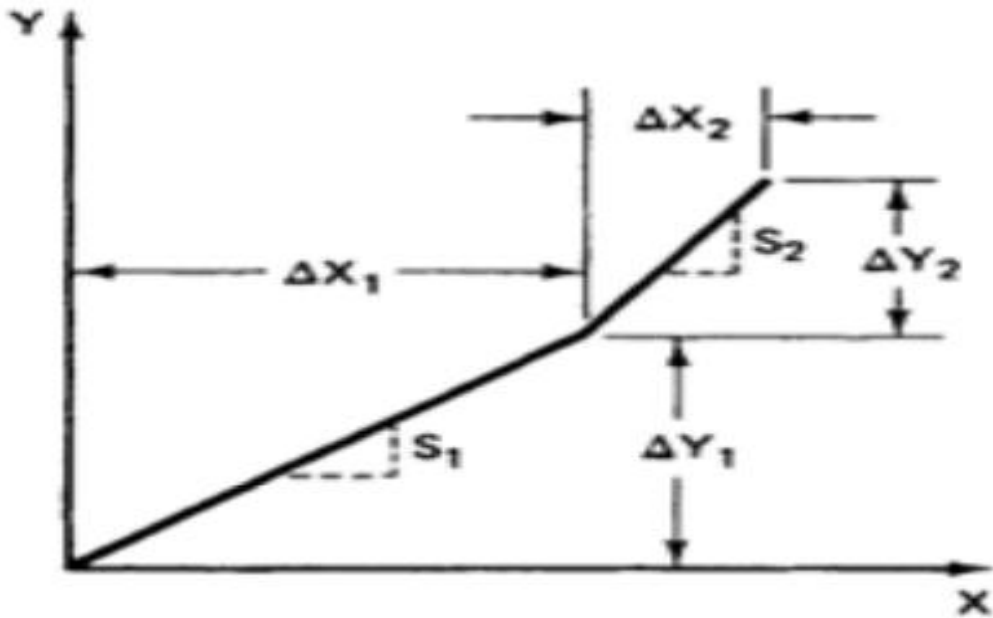
- ❖ A double-mass curve is a graph of the cumulative catch at the rain gage of interest versus the cumulative catch of one or more gages in the regions that have been subjected to similar hydro meteorological occurrences and are known to be consistent
- ❖ If a double- mass curve has a constant slope, the record is consistent.
- ❖ If a double –mass curve has not a constant slope, the record is not consistent and need to be adjusted.

Cont....

- Steps to check and adjust the consistency of rainfall data of a station X
 - I. The doubtful station, say A, is marked and the group of stations surrounding it are identified.
 - II. Determine the cumulative rainfall of the station A
 - III. Sum the data of the neighboring stations and determine the cumulative
 - IV. Plot the sum cumulative rainfall of stations with cumulative station A to determine the double mass curve
 - V. If there is a changing slope in the double-mass curve, adjust it correct the data of station A by the adjustment factor

Cont.....

- Say the slopes of the two sections, S_1 , and S_2 , can be computed from the cumulative catches:

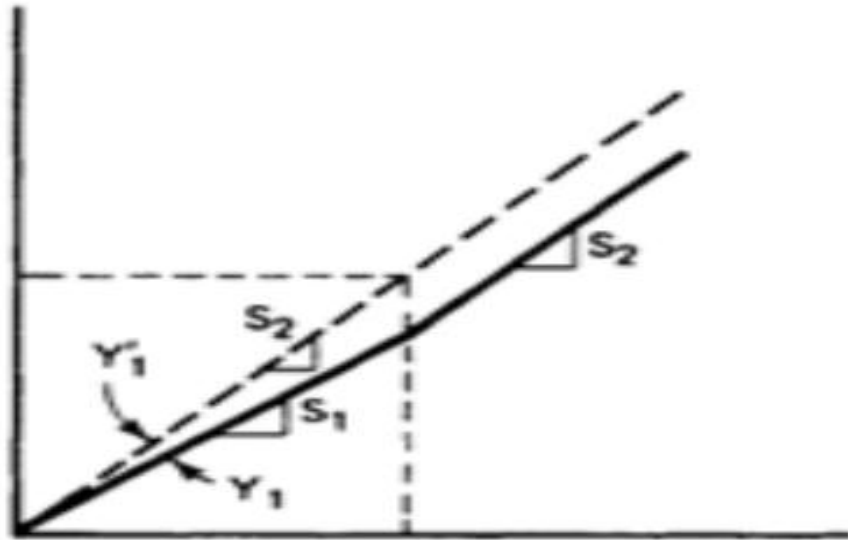


(a) Notation

$$S_i = \frac{\Delta Y_i}{\Delta X_i}$$

Cont..

- Adjustment of the initial data of a station
- $\frac{S_2}{S_1}$ is the adjustment factor and multiplying each value in the Y_1 series by the adjustment factor



$$y_1 = \frac{S_2}{S_1} Y_1$$

(b) Adjustment of lower section

Cont...

- Example: Adjustment of the Lower Section of a Double -Mass Curve.
- In the table below annual rainfalls of gage E, F, G and H are given. Gage H was permanently relocated after a period of 3 yr (at the end of 1981); thus adjust the recorded values from 1979 through 1981 of gage H using double mass curve assume the data for the other gages are consistent.

Year	Annual Catch (in.) at Gage			
	<i>E</i>	<i>F</i>	<i>G</i>	<i>H</i>
1979	22	26	23	28
1980	21	26	25	33
1981	27	31	28	38
1982	25	29	29	31
1983	19	22	23	24
1984	24	25	26	28
1985	17	19	20	22
1986	21	22	23	26

- Solution

Year	Annual Catch (in.) at Gage				TOTAL $E + F + G$	Cumulative Catch (in.) for Gage		h_1
	E	F	G	H		$E + F + G$	H	
1979	22	26	23	28	71	71	28	24.7
1980	21	26	25	33	72	143	61	29.1
1981	27	31	28	38	86	229	99	33.5
1982	25	29	29	31	83	312	130	
1983	19	22	23	24	64	376	154	
1984	24	25	26	28	75	451	182	
1985	17	19	20	22	56	507	204	
1986	21	22	23	26	66	573	230	

Cont...

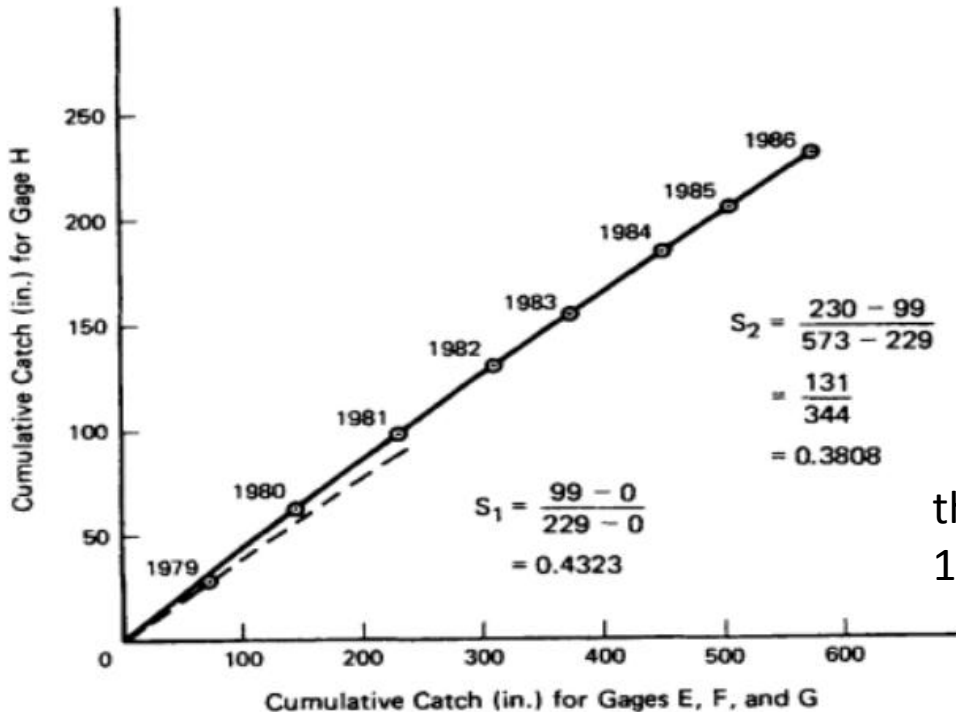
- Plot

The slope for the 1979-1981 period is

$$S_1 = \frac{99 - 0}{229 - 0} = 0.4323$$

The slope from 1982 to 1986 is

$$S_2 = \frac{230 - 99}{573 - 229} = 0.3808$$



the adjusted values from 1979 through 1981 can be computed using

$$h_1 = \left(\frac{0.3808}{0.4323} \right) H_1 = 0.8809H_1$$

Cont....

- Example Adjustment of the Upper Section of a Double-Mass Curve
- Data for gages A, B, and C and D are given the table below. Check the consistence of data for gage D and adjust it using double-mass curve method.

Year	Annual Catch (in.) at Gage			
	A	B	C	D
1977	30	31	27	29
1978	33	36	32	32
1979	26	27	24	28
1980	27	26	27	29
1981	34	34	30	30
1982	31	33	31	29
1983	28	30	24	28
1984	35	34	33	39
1985	37	39	36	41
1986	34	35	35	37

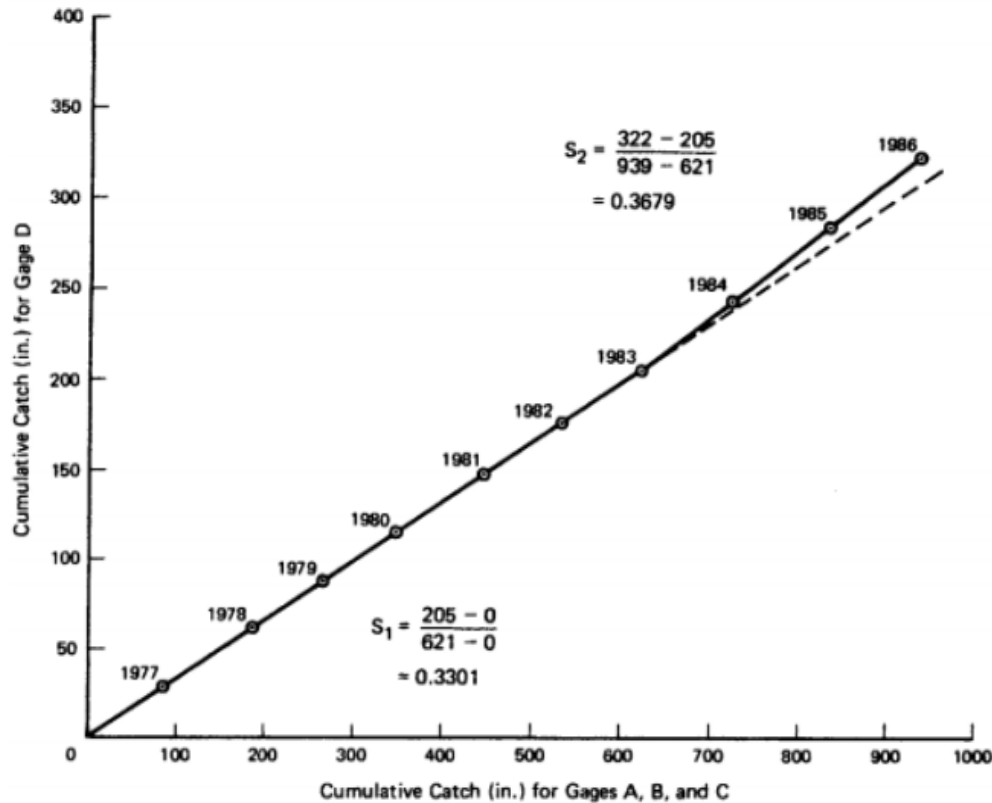
Cont..

- Solution

Year	Annual Catch (in.) at Gage				TOTAL $A + B + C$	Cumulative Catch (in.)		d_2
	A	B	C	D		$A + B + C$	D	
1977	30	31	27	29	88	88	29	
1978	33	36	32	32	101	189	61	
1979	26	27	24	28	77	266	89	
1980	27	26	27	29	80	346	118	
1981	34	34	30	30	98	444	148	
1982	31	33	31	29	95	539	177	
1983	28	30	24	28	82	621	205	
1984	35	34	33	39	102	723	244	35.0
1985	37	39	36	41	112	835	285	36.8
1986	34	35	35	37	104	939	322	33.2

Cont...

- Plot



the slope for the 1977-1983 period is

$$S_1 = \frac{205 - 0}{621 - 0} = 0.3301$$

The slope for the 1984-1986 period is

$$S_2 = \frac{322 - 205}{939 - 621} = 0.3679$$

the equation for adjusting the upper section of the curve is

$$d_2 = \left(\frac{0.3301}{0.3679} \right) D_2 = 0.8973 D_2$$

Cont.....

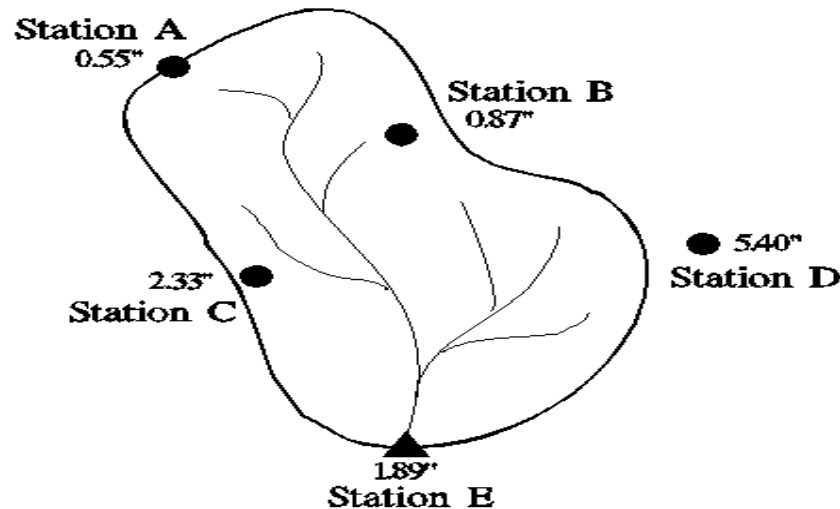
☐ Mean Areal Depth of Rainfall (Average Areal Rainfall)

- ❖ Two of the more common problems where this type of analysis could be used are
 - ✓ In the computation of the probable maximum flood for larger watersheds and
 - ✓ in the analysis of actual storm events in which the rainfall depths were measured at more than one rain gage.
- ❖ Average Areal Rainfall over an area is found using the existing stations using interpolation techniques (extending the point rainfall to areal estimates) and helps to estimate the rainfall amount at the ungaged areas.

Cont....

❖ Some of the methods for estimating the areal rainfall of an area from point rainfalls are

- Station-Average Method
- Thiessen Polygon Method
- Isohyetal Method



Cont....

I. Station-Average Method (Arithmetic mean Method)

$$\bar{P} = \frac{1}{n} \sum_{i=1}^n P_i$$

Where

\bar{P} = the average rainfall,

P_i = the rainfall measured at station i

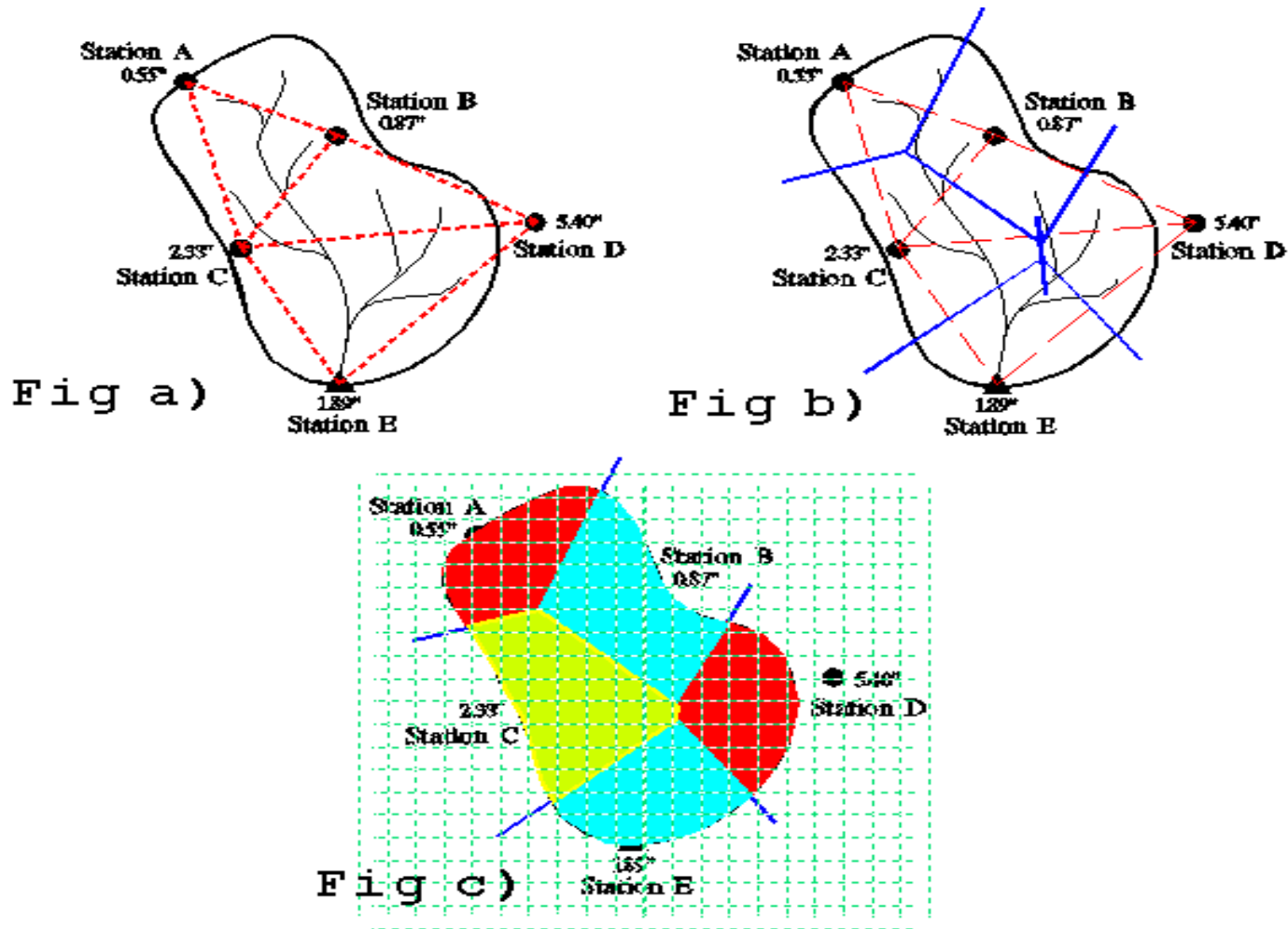
n = the number of rain gages, and

Note

The use of this Equation will provide reasonably accurate estimates of \bar{P} when there are no Significant orographic effects, the gages are uniformly spaced throughout the watershed, and the rainfall depth over the entire watershed is nearly constant.

Cont....

Theissen Polygon Method (nearest point method)



Cont.....

- ❖ The steps for Thiessen polygon method are:
 - Construct polygons by connecting stations with lines
 - Bisect the polygon sides
 - Estimate the area of each station's polygon
 - Sum the areas
 - Determine the station weights by dividing the station area by the total area
 - Determine areal precipitation by summing weighted precipitation for each station

Cont....

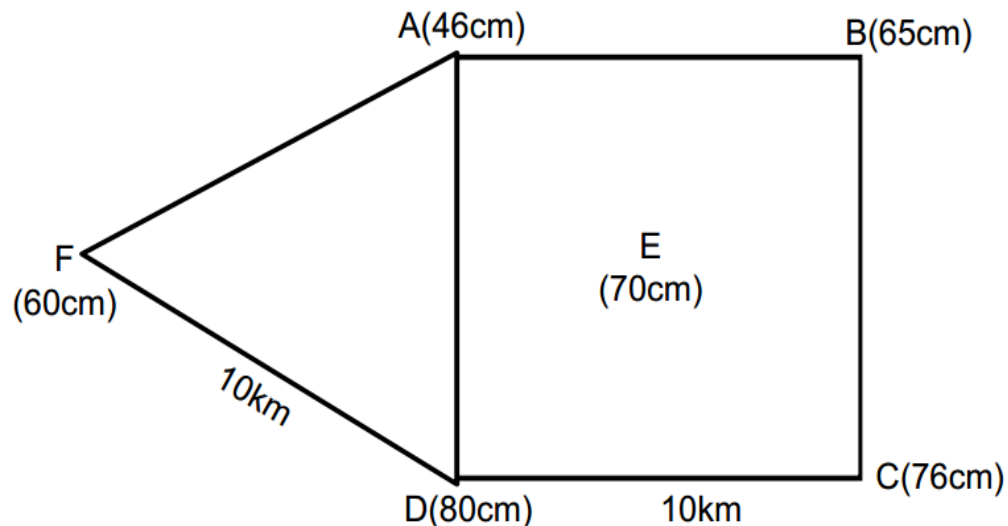
❖ Theissen polygone method

- Unique for each gage network
- Allows for areal weighing of precipitation data
- Does not allow for orographic effects (those due to elevation changes)
- Most widely used method for cases where there are large differences in the catches at the rain gages and/or the rain gages are not uniformly distributed throughout the watershed,

Cont...

Examples

The area shown in Fig. below is composed of a square plus an equilateral triangular plot of side 10 km. The annual precipitations at the rain-gauge stations located at the four corners and center of the square plot and apex of the triangular plot are indicated in the figure. Find the mean precipitation over the area by Thiessen polygon method, and compare with the station average method (arithmetic mean method)

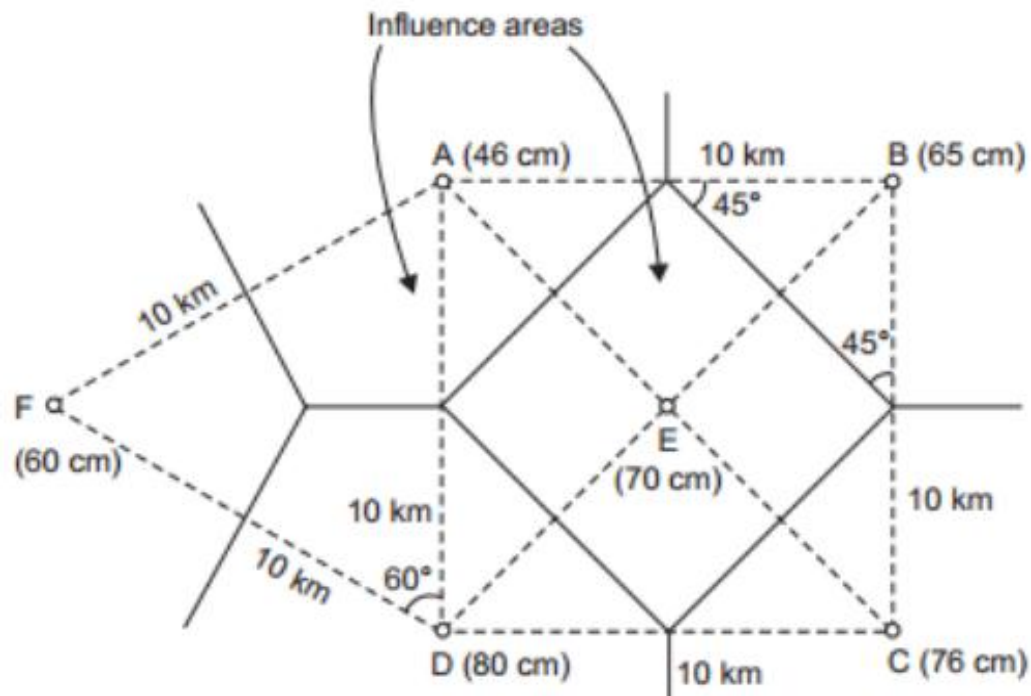


Cont.....

❖ Solution

✓ Using Thiessen polygon method

The Thiessen polygon is constructed by drawing perpendicular bisectors to the lines joining the rain-gauge stations as shown in Fig. below. The weighted mean precipitation is computed in the following table



Cont...

- The area of each polygon are

$$\text{Area of square plot} = 10 \times 10 = 100 \text{ km}^2$$

$$\text{Area of inner square plot} = \frac{10}{\sqrt{2}} * \frac{10}{\sqrt{2}} = 50 \text{ km}^2$$

$$\text{Difference} = 50 \text{ km}^2$$

$$\text{Area of each corner triangle in the square plot} = \frac{56}{4} = 12.5 \text{ km}^2$$

$$\frac{1}{3} \text{ area of the equilateral triangular plot} = \frac{1}{3} \left(\frac{1}{2} * 10 * 10 * \sin 60 \right) = 14.4 \text{ km}^2$$

Cont....

station	Area, A(km ²)	Precipitation(cm)	A*P(km ² -cm)	Pave
A	(12.5 + 14.4)=26.9	46	1238	$\frac{\sum A*P}{\sum A}=66.3\text{cm}$
B	12.5	65	813	
C	12.5	76	950	
D	(12.5+14.4)=26.9	80	2152	
E	50	70	3500	
F	14.4	60	864	
n=6	$\sum A=143.2$	$\sum P=397$	$\sum A * P= 9517$	

- Using arithmetic mean method

$$\bar{P} = \frac{1}{n} \sum_{i=1}^n P_i$$

Pave = $\frac{397}{6}$ = 66.17 cm which compares fairly with the weighted mean.

Cont...

□ Isohyetal Method

$$\bar{P} = \sum_{i=1}^n \left(\frac{A_i}{A} \right) \bar{P}_i$$

Where

A_i = the area of the watershed between isohyets i and $i + 1$,

P_i = the average precipitation for isohyets i and $i + 1$, and

n = the number of isohyetal intervals.

$\frac{A_i}{A}$ = the weight applied to the particular precipitation range.

Cont.....

- Steps for the isohyetal method
 - I. Draw lines of equal precipitation or rainfall (isohyets)
 - II. Estimate the precipitation between the isohyets
 - III. Determine the area between the isohyets
 - IV. Multiply step II and III and sum the values
 - V. Divide the sum by the total area of the basin to get area rainfall estimation

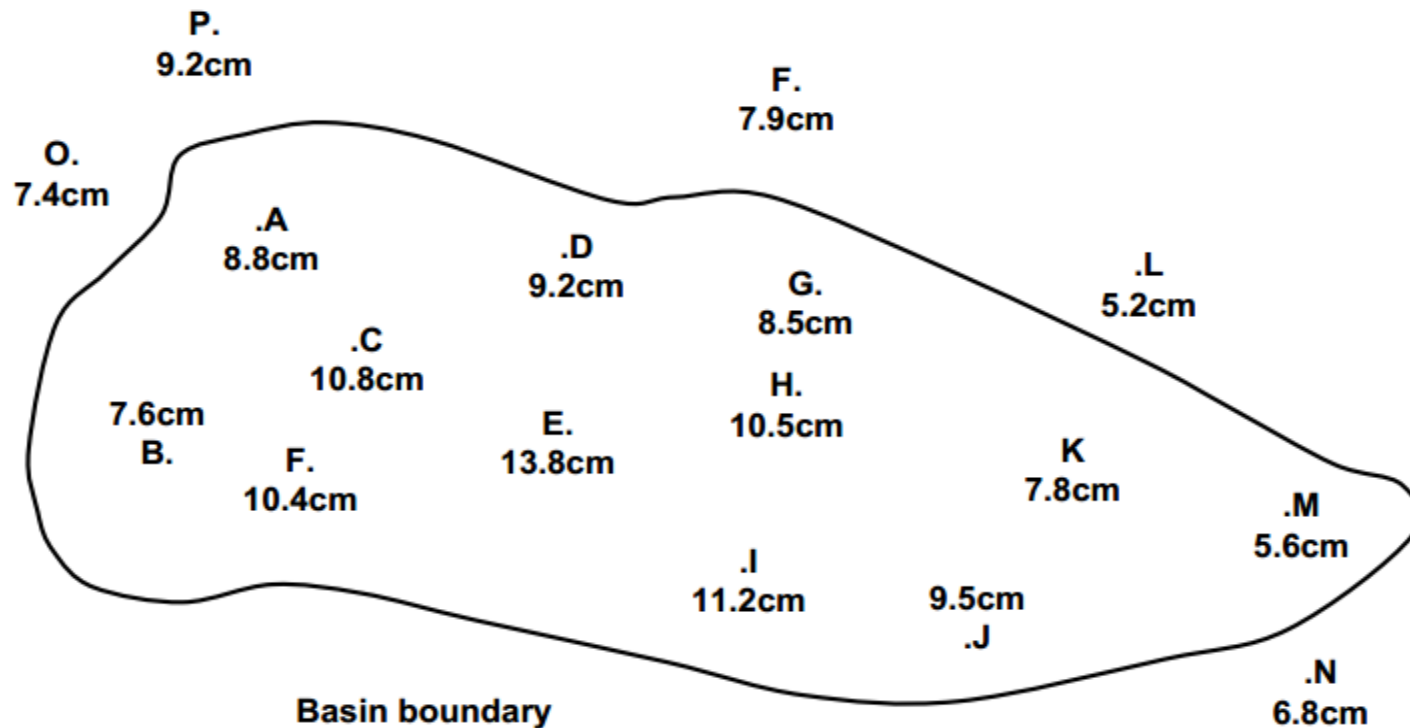
Note

The isohyetal method considers topographical effects but it is difficult to draw the isohyets

Cont...

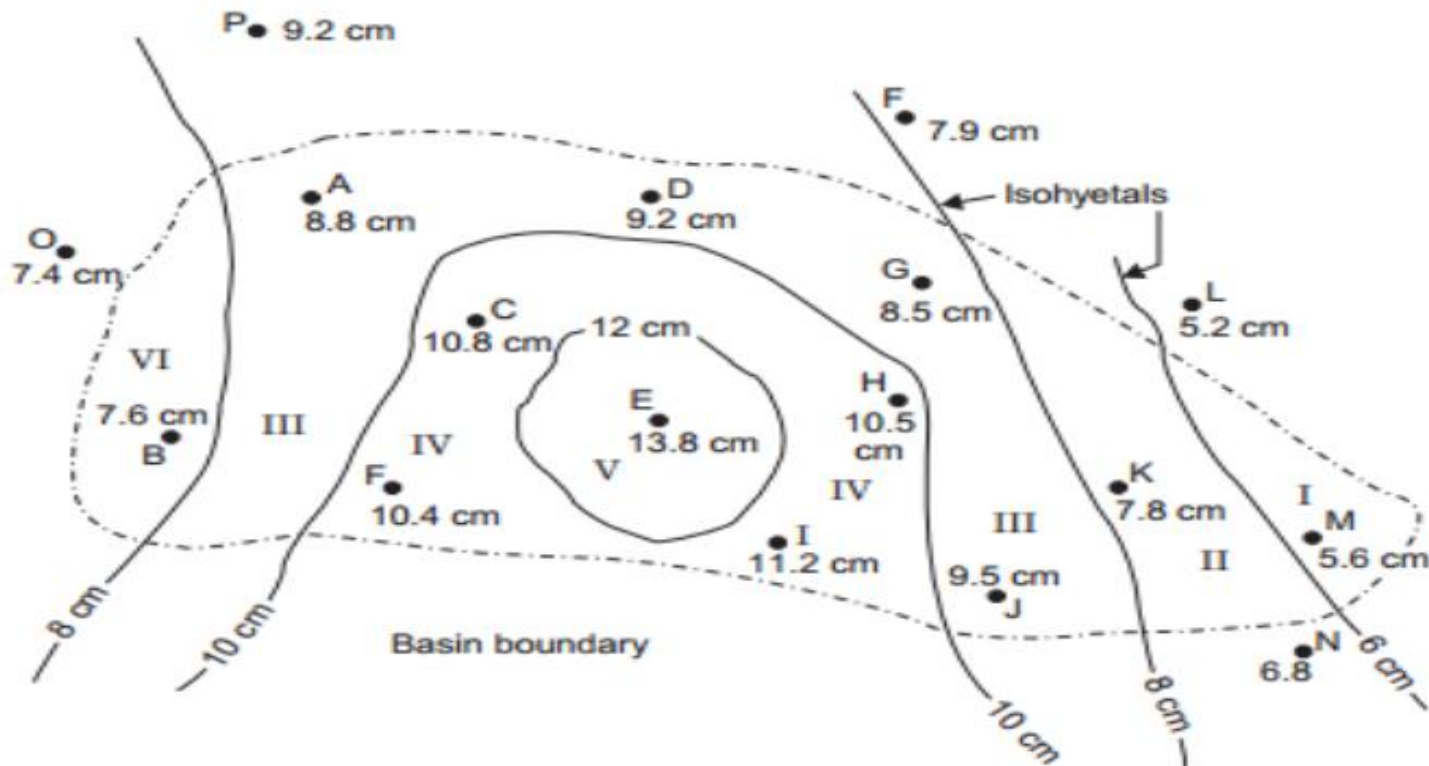
Example

- Point rainfalls due to a storm at several rain-gauge stations in a basin are shown in Fig. blow. Determine the mean areal depth of rainfall over the basin by the isohyetal method.



Cont...

- Solution
- The isohyets are drawn as shown below and the mean areal depth of rainfall is worked out in the table below



Cont...

- Here is the worked out

<i>Zone</i>	<i>Isohyets (cm)</i>	<i>Mean isohyetal value, P_{1-2} (cm)</i>	<i>Area between isohyets, A_{1-2} (km²)</i>	<i>Product (3) × (4) (km²·cm)</i>	<i>Mean areal depth of rainfall (cm)</i>
<i>1</i>	<i>2</i>	<i>3</i>	<i>4</i>	<i>5</i>	<i>6</i>
I	<6	5.4	410	2214	$P_{ave} =$ $\frac{\Sigma A_{1-2} P_{1-2}}{\Sigma A_{1-2}}$ $= \frac{66754}{7180}$ $= 930 \text{ cm}$
II	6-8	7	900	6300	
III	8-10	9	2850	25650	
IV	10-12	11	1750	19250	
V	>12	12.8	720	9220	
VI	<8	7.5	550	4120	
Total			7180 km ² = ΣA_{1-2}	66754 km ² ·cm = $\Sigma A_{1-2} P_{1-2}$	

OPTIMUM RAIN-GAUGE NETWORK DESIGN

- When the mean areal depth of rainfall is calculated by the simple arithmetic average, the optimum number of rain-gauge stations to be established in a given basin is given by the equation.

$$N = \left(\frac{C_v}{p} \right)^2$$

Where

N= optimum number of rain gauge stations to be established in the basin

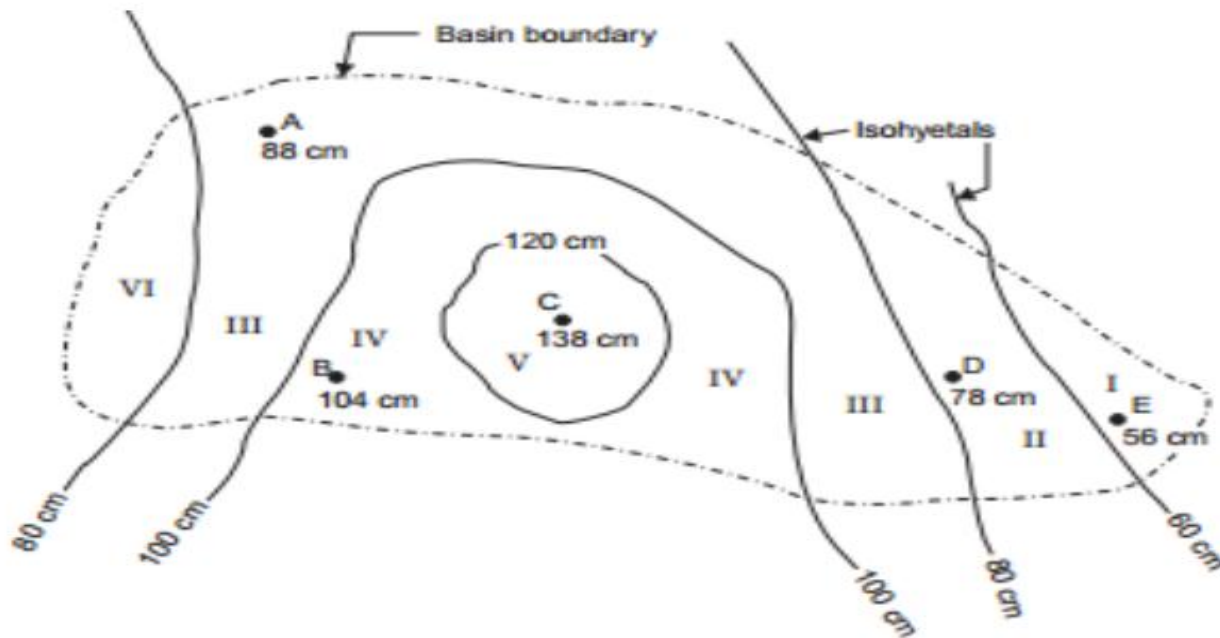
Cv= Coefficient of variation of the rainfall of the existing rain gauge stations (say, n)

p= desired degree of percentage error in the estimate of the average depth of rainfall over the basin

The number of additional rain-gauge stations (N–n) should be distributed in the different zones (caused by isohyets) in proportion to their areas, i.e., depending upon the spatial distribution of the existing rain-gauge stations and the variability of the rainfall over the basin

Example

For the basin shown in Fig below, the normal annual rainfall depths recorded and the isohyets are given. Determine the optimum number of rain-gauge stations to be established in the basin if it is desired to limit the error in the mean value of rainfall to 10%. Indicate how you are going to distribute the additional rain-gauge stations required, if any. What is the percentage accuracy of the existing network in the estimation of the average depth of rainfall over the basin?



Cont...

- solution

<i>Station</i>	<i>Normal annual rainfall, x (cm)</i>	<i>Difference $(x - \bar{x})$</i>	<i>(Difference)² $(x - \bar{x})^2$</i>	<i>Statistical parameters \bar{x}, σ, C_v</i>
A	88	- 4.8	23.0	$\bar{x} = \frac{\Sigma x}{n} = \frac{464}{5}$ $= 92.8 \text{ cm}$ $\sigma = \sqrt{\frac{\Sigma(x - \bar{x})^2}{n - 1}}$ $= \sqrt{\frac{3767.4}{5 - 1}} = 30.7$
B	104	11.2	125.4	
C	138	45.2	2040.0	
D	78	- 14.8	219.0	
E	56	- 36.8	1360.0	
$n = 5$	$\Sigma x = 464$		$\Sigma(x - \bar{x})^2 = 3767.4$	$C_v = \frac{\sigma}{\bar{x}} = \frac{30.7}{92.8} \times 100$ $= 33.1\%$

Cont....

The optimum number of rain-gauge stations to limit the error in the mean value of rainfall to $p=10\%$

$$N = \left(\frac{C_v}{p} \right)^2 = \left(\frac{33.1}{10} \right)^2 = 11$$

\therefore Additional rain-gauge stations to be established = $N - n = 11 - 5 = 6$ The additional six rain gauge stations have to be distributed in proportion to the areas between the isohyets as shown below

Cont...

<i>Zone</i>	<i>I</i>	<i>II</i>	<i>III</i>	<i>IV</i>	<i>V</i>	<i>VI</i>	<i>Total</i>
Area (Km ²)	410	900	2850	1750	720	550	7180
Area, as decimal	0.06	0.12	0.40	0.24	0.10	0.08	1.00
N × Area in decimal (N = 11)	0.66	1.32	4.4	2.64	1.1	0.88	
Rounded as	1	1	4	3	1	1	11
Rain-gauges existing	1	1	1	1	1	—	5
Additional rain gauges	—	—	3	2	—	1	6

These additional rain-gauges have to be spatially distributed between the different isohyets after considering the relative distances between rain-gauge stations, their accessibility, personnel required for making observations, discharge sites, etc.

Cont....

The percentage error p in the estimation of average depth of rainfall in the existing network,

$$p = \frac{C_v}{\sqrt{N}}, \text{ putting } N = n$$

$$P = \frac{33.1}{\sqrt{5}} = 14.8\%$$

Or, the percentage accuracy = 85.2%

ANALYSIS OF RAINFALL DATA

- Rainfall during a year or season (or a number of years) consists of several storms. The characteristics of a rainstorm are:
 - I. Intensity (cm/hr)
 - II. Duration (min, hr, or days)
 - III. Frequency (once in 5 years or once in 10, 20, 40, 60 or 100 years), and
 - IV. Areal extent (i.e., area over which it is distributed).

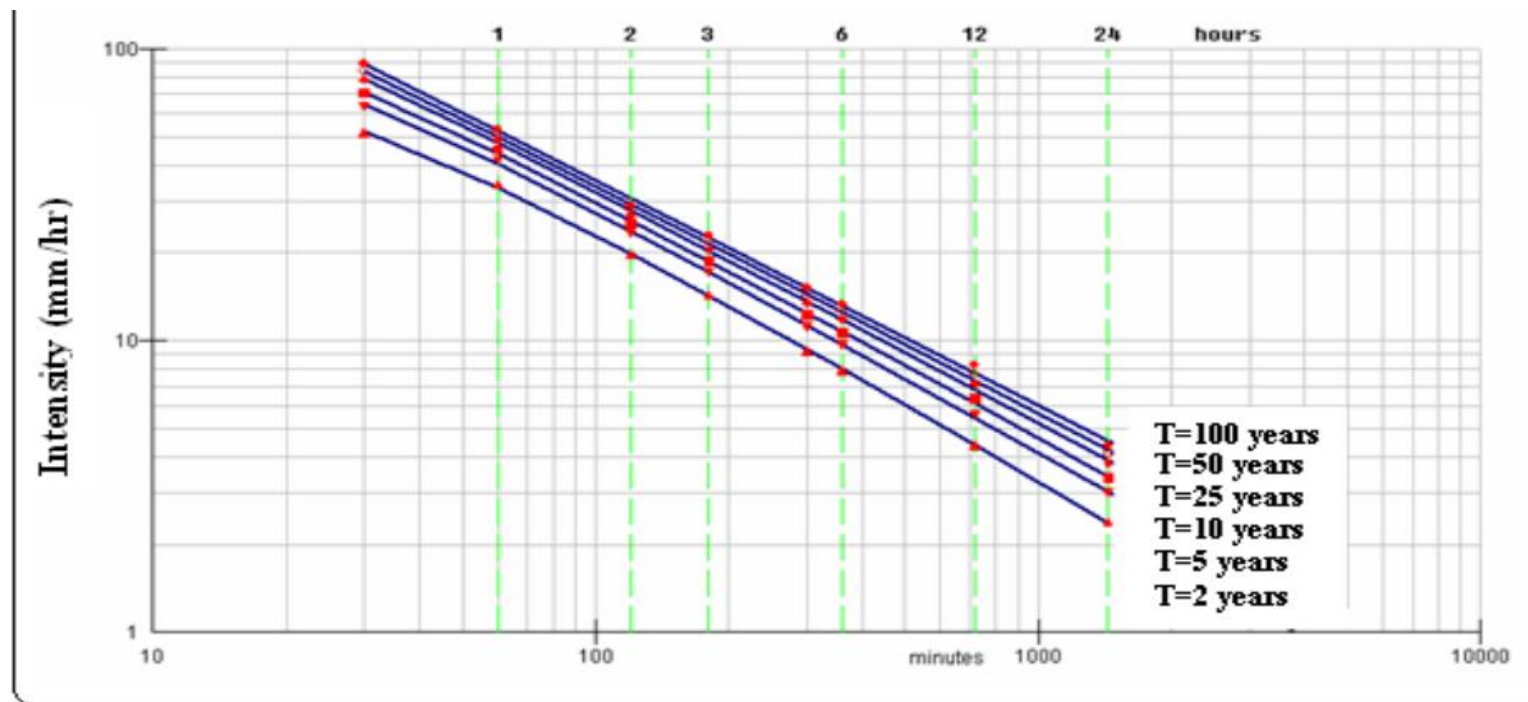
Intensity, Duration and Frequency (IDF) curves

- ❖ An IDF is a three parameter curve, in which intensity of a certain return period is related to duration of rainfall event
- An IDF curve enables the hydrologists to develop hydrologic systems that consider worst-case scenarios of rainfall intensity and duration during a given interval of time
- For instance, in urban watersheds, flooding may occur such that large volumes of water may not be handled by the storm water system appropriate values of precipitation intensities and frequencies should be considered in the design of the hydrologic systems

Cont....

❖ The use of IDF curve

- It is often used by entering with the duration and frequency to find the intensity. Or
- It is used to find the frequency for a measured storm event. The predicted frequency is determined by finding the intersection of the lines defined by the measured intensity and the storm duration.



IDF curves plotted on double logarithmic scale for Bahir Dar Station

Mathematical Representation of IDF Curves

- The following equations can provide a reasonably accurate representation of an IDF curve:

$$i = \begin{cases} \frac{a}{D + b} & \text{for } D \leq 2 \text{ hr} \\ cD^d & \text{for } D > 2 \text{ hr} \end{cases}$$

Where

i is the rainfall intensity (cm/hr)

D is the duration (hr) and

a , b , c , and d are fitting coefficients that vary with the frequency. Values for the coefficients are easily obtained by transforming the Equation to linear forms and evaluating the coefficients using any two points of the IDF curve by solving two simultaneous equations.

Cont....

- How to transform the first equation in to linear equation

$$i = \frac{a}{b + D}$$

$$\frac{1}{i} = \frac{b + D}{a}$$

$$y = f + gD$$

Where

$$y = \frac{1}{i}$$

$$f = \frac{b}{a} \text{ and}$$

$$g = \frac{1}{a}$$

Cont...

- How to transform the second equation in to linear equation

$$i = cD^d$$

$$\log i = \log c + d \log D$$

$$y = h + dx$$

Where

$$y = \log i,$$

$$h = \log c, \text{ and}$$

$$x = \log D.$$

❖ The accuracy depends

- on the reading accuracy of the two points selected and on the ability of Equation s to represent the shape of the IDF curve.
- Greater accuracy can be achieved by using numerous points from the IDF curve and fitting the coefficients of the linear Equations using least squares

Examples on IDF

From IDF curve of 2-yr frequency two Points are taken: ($i = 4.1$ cm/hr, $D = 1/6$ hr) and ($i = 0.81$, $D = 2$). Develop the formula for the IDF curve.

solution

$$0.2439 = f + g(0.1667)$$

$$1.2346 = f + g(2)$$

Solving Equations for f and g yields $f = 0.1538$ and $g = 0.5404$. Solving for a and b yields the following:

$$i = \frac{1.8505}{0.2847 + D} \quad \text{for } D \leq 2 \text{ hr}$$

Cont...

- For durations greater than 2 hr, the following two points are taken from IDF curve, develop a formula for the IDF curve be ($i = 0.5, D = 4$) and ($i = 0.3, D = 8$).
- Solution
- Making natural-logarithm transformation yields $d = -0.7370$ and $h = 0.3286$. thus the equation becomes

$$i = 1.389D^{-0.7370} \quad \text{for } D > 2 \text{ hr}$$